

GREENWOOD PUBLIC SCHOOL ADITYAPURAM

HINDI WORKSHEET CLASS: UKG

Write counting from 1 to 100.

T	O	T	O	T	O	T	O	T	O	T	O	T	O	T	O	H	T	O

Write the numbers name (1 to 10).

One -----

Six -----

Two -----

Seven-----

Three -----

Eight -----

Four -----


Nine -----

Five -----

Ten -----

GREENWOOD PUBLIC SCHOOL ADITYAPURAM


MATHS WORKSHEET CLASS: UKG





GREENWOOD PUBLIC SCHOOL ADITYAPURAM


MATHS WORKSHEET CLASS: UKG

Colour the correct object according to the number -








2 








4 






3 








5 

Missing numerals

1    5   8  

     17  

 22   26   29 30

  33    37  39 

GREENWOOD PUBLIC SCHOOL ADITYAPURAM

MATHS WORKSHEET CLASS: UKG

Write the tables of 2 and 3.

2	x	1	=	2

3	x	1	=	3

Add the following.

$2+4 = \square$

$3+3 = \square$

$6+2 = \square$

$3+5 = \square$

$4+4 = \square$

$5+2 = \square$